

Date _____


Name _____



Counting in 2s, 5s and 10s At the Market



There are 10 carrots
in a bag.



There are 5 pineapples
in a crate.



There are 2 swedes in a
basket.

How many carrots does the shop have altogether?



They sell 3 bags. How many now?




They sell 2 more bags. How many now?



How many pineapples does the shop have altogether?



They sell 2 crates. How many now?



They sell 3 more crates. How many now?




How many swedes does the shop have altogether?



They sell 3 baskets. How many now?




1. How many swedes are there in 6 baskets?
2. How many swedes are there in 10 baskets?
3. How many baskets are needed for 14 swedes?



4. How many pineapples are there in 5 crates?
5. How many pineapples are there in 9 crates?
6. How many crates are needed for 30 pineapples?



7. How many carrots are there in 3 bags?
8. How many carrots are there in 7 bags?
9. How many bags are needed for 60 carrots?



1. Joe wants 22 swedes. How many baskets does he need to buy?
2. Andy wants 35 pineapples. How many crates does he need to buy?
3. Stephanie wants 90 carrots. How many bags does she need to buy?
4. Chris wants 18 swedes. How many baskets does he need to buy?
5. Rosie wants 55 pineapples. How many crates does she need to buy?
6. Harriet wants 40 carrots. How many bags does she need to buy?

Challenge questions: Carrots cost 8p. Pineapples cost 12p. Swedes cost 6p.

1. How much do 3 pineapples cost?
2. How much do 6 carrots cost?
3. How much do 5 swedes cost?
4. How much do 11 carrots cost?
5. How much do 6 pineapples cost?