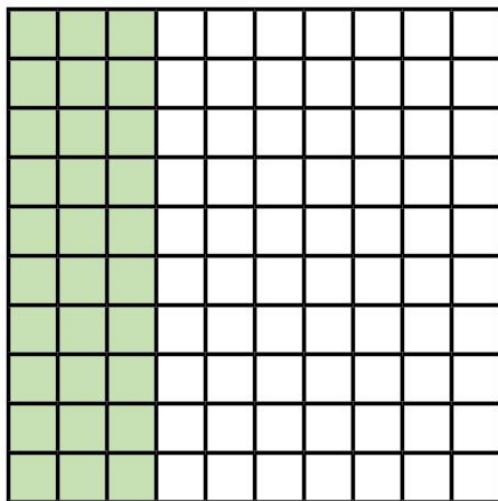


Complements to 1


1 Each hundred square represents one whole.

Use the hundred squares to help you complete the additions.

a) $0.3 + \square = 1$




b) $0.35 + \square = 1$

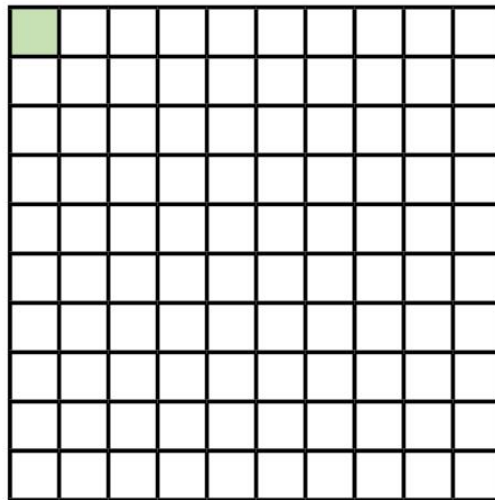


1

c) $1 = \square + 0.79$



d) $\square + 0.01 = 1$







2 Complete the calculations.

Shade the hundred squares to help you.

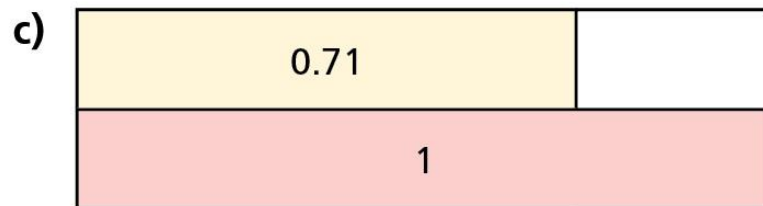
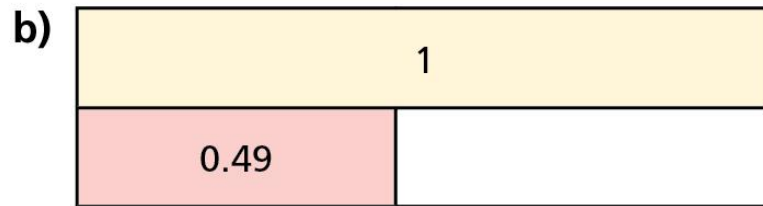

a) $1 = 0.47 + \square$



b) $0.02 + 0.2 + \square = 1$

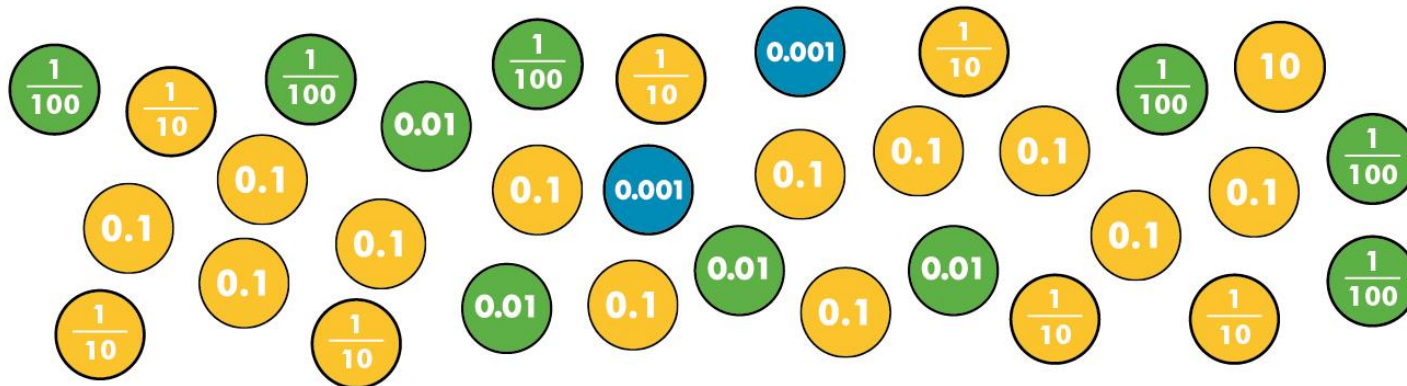


3 Complete the bar models.





4 Teddy has these counters.



He wants to exchange these for as many 1s counters as possible.

How many 1s counters can he collect?

5 Complete the additions.

$$54 + \boxed{} = 100$$

$$5.4 + \boxed{} = 10$$

$$0.54 + \boxed{} = 1$$

$$0.054 + \boxed{} = 0.1$$

What is the same and what is different about your answers?



6

Complete the sentences.

a) 6 tenths + tenths = 1 whole

b) 23 hundredths + hundredths = 1 whole

c) 2 tenths + hundredths + tenths = 1 whole





7

Match the pairs of decimals that add together to make 1 whole.

0.12

0.988

0.21

0.79

0.212

0.778

0.012

0.788

0.222

0.88



8

Mo has completed these calculations.

He has got them all incorrect.

What mistake has Mo made?

$$\text{a) } 0.22 + 0.88 = 1$$

$$\text{b) } 0.39 + 0.71 = 1$$

$$\text{c) } 0.677 + 0.433 = 1$$

Correct Mo's calculations.

$$\text{a) } 0.22 + \boxed{} = 1$$

$$\text{c) } 0.677 + \boxed{} = 1$$

$$\text{b) } 0.39 + \boxed{} = 1$$