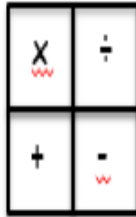
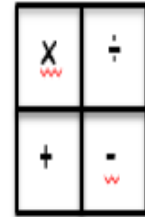


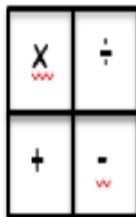
Jason took 60p to the school fete. He has 25p left. How much has he spent?




Amy has 36 Barbies. Kulsuma has 7 less than Amy. How many does Kulsuma have?



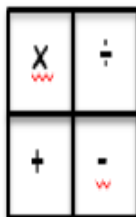
Ellie has 24 sweets. She shares them among 6 friends. How many sweets do they get each?



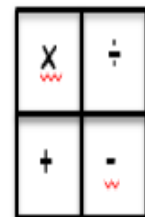
Warda has 63 marbles. She loses 41. How many does she have left?



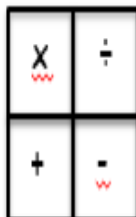
There are 4 cakes in 1 box. How many are there in 8 boxes?



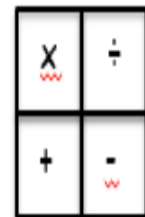
Amy saves 94p. She spends 8p. How much does she have left?



Ben has 22 cars. James has 25 more than Ben. How many does James have?



Miss Gaunt eats 3 bananas a day. How many does she eat in 4 days?



Don't forget to use the RUCSAC method!