



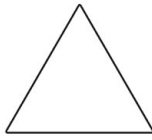
# Code Breaking




1



7



3



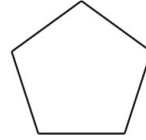
8



4



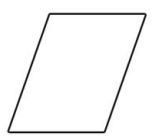
2



9




6



5

## Example

In the number



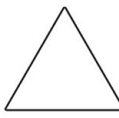
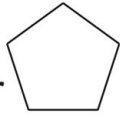
, what is



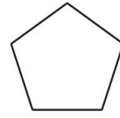
worth?

20

1. In the number



, what is



worth?

\_\_\_\_\_

2. In the number




, what is



worth?

\_\_\_\_\_

3. In the number



, what is




worth?

\_\_\_\_\_

4. In the number



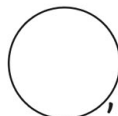
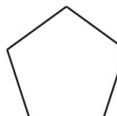
, what is




worth?

\_\_\_\_\_

5. In the number



, what is



worth?

\_\_\_\_\_

6. In the number



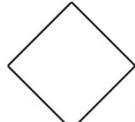
, what is



worth?

\_\_\_\_\_

7. In the number



, what is



worth?

\_\_\_\_\_

8. In the number




, what is




worth?

\_\_\_\_\_

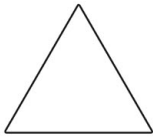
# Code Breaking




1



7



3



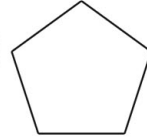
8



4



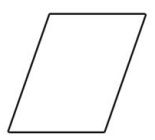
2



9



6



5

## Example

In the number









, what is











worth?





20





1. In the number   , what is  worth? \_\_\_\_\_






2. In the number   , what is  worth? \_\_\_\_\_





3. In the number    , what is  worth? \_\_\_\_\_

4. In the number    , what is  worth? \_\_\_\_\_


5. In the number    , what is  worth? \_\_\_\_\_

6. In the number    , what is  worth? \_\_\_\_\_


7. In the number     , what is  worth? \_\_\_\_\_

8. In the number    , what is  worth? \_\_\_\_\_

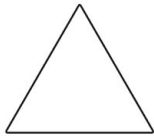
# Code Breaking




1



7



3



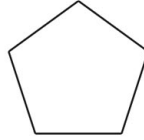
8



4



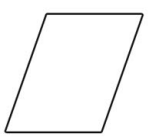
2



9



6



5

## Example

In the number











, what is











worth?






20






1. In the number   , what is  worth? \_\_\_\_\_






2. In the number   , what is  worth? \_\_\_\_\_






3. In the number   , what is  worth? \_\_\_\_\_

4. In the number   , what is  worth? \_\_\_\_\_

5. In the number    , what is  worth? \_\_\_\_\_

6. In the number    , what is  worth? \_\_\_\_\_

7. In the number    , what is  worth? \_\_\_\_\_

8. In the number    , what is  worth? \_\_\_\_\_

# Code Breaking Answers

★

- 1) 90
- 2) 2
- 3) 10
- 4) 8
- 5) 7
- 6) 4
- 7) 40
- 8) 30

★★

- 1) 70
- 2) 9
- 3) 20
- 4) 8
- 5) 900
- 6) 60
- 7) 40
- 8) 300

★★★

- 1) 900
- 2) 20
- 3) 50
- 4) 90
- 5) 4000
- 6) 5
- 7) 3000
- 8) 100